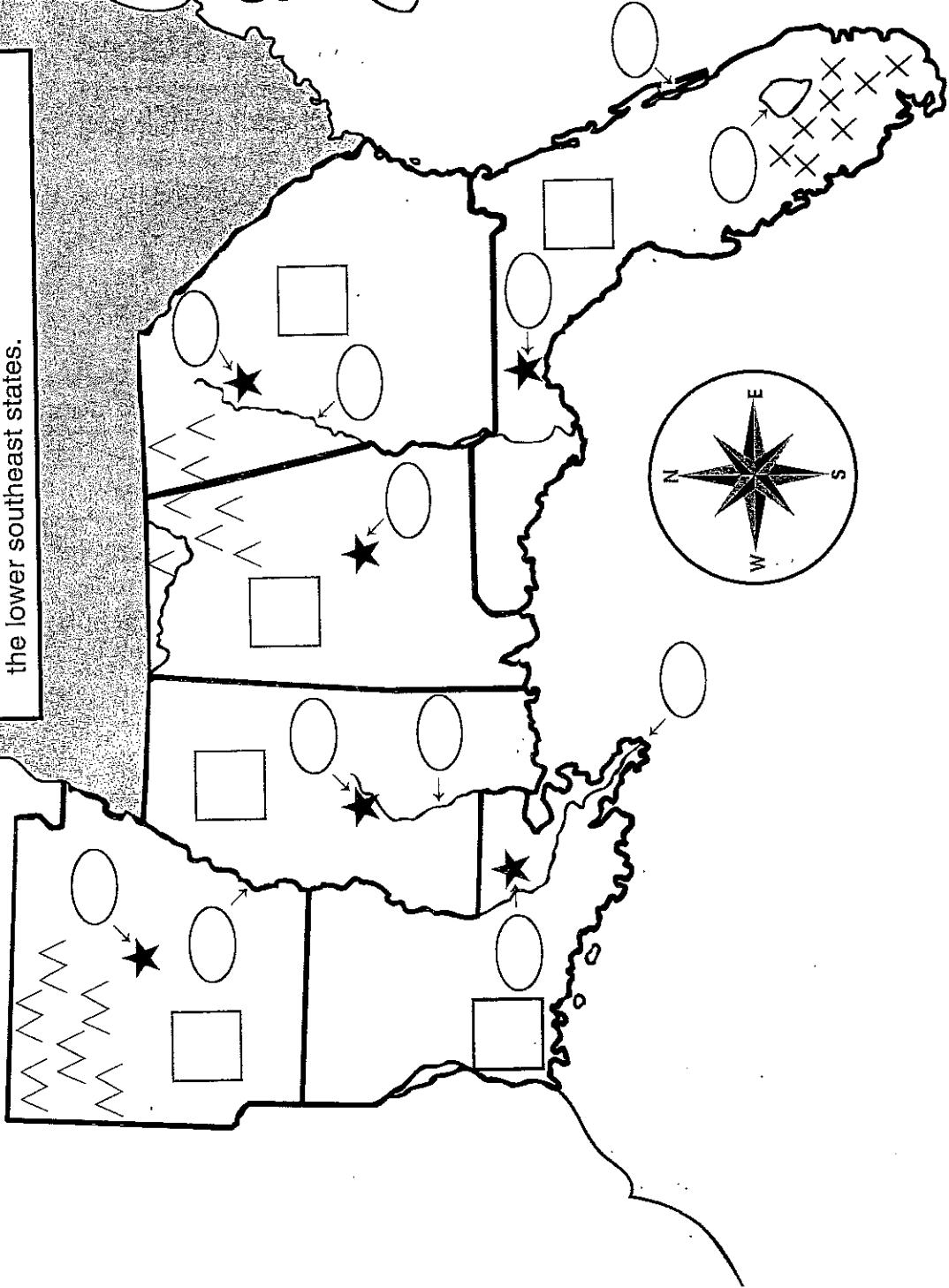


Name _____

More Gator Geography

Howdy again!
Now follow the directions to complete the map of
the lower southeast states.



Key	
★	state capital
~	river
—	state boundary
▨	other southeast states
□	states bordering southeast states
⌵	Ozark Mountains
⌵	Appalachian Mountains
×	Everglades

How to Use Pages 27 and 28

Copy the map for each student. The map can be used in several ways.

- For an independent activity, copy the directions below for each student.
- For a cooperative-learning activity, divide students into small groups. Copy the directions for each group. Have students work together to complete their maps.
- For a teacher-directed activity, make a transparency of the directions and project them onto a screen. Cover the directions with a sheet of paper, sliding the paper down to reveal one step at a time as you assist students in completing their maps or as you complete an overhead transparency of the map along with your students.

Name _____ Map skills _____

The Lower Southeast States

Follow the directions below to complete the map. Do not color the □s and ○s on your map.

Part 1: Basic Labeling and Coloring

- Label each □ with the state's postal abbreviation.
- Color the other bordering southeast states green.
- Color any other states bordering the southeast states yellow.
- The **Atlantic Ocean** is east of the southeast states. Color it blue.
- The **Gulf of Mexico** is south of the southeast states. Color it blue.
- Trace the symbols for the **Appalachian Mountains** and the **Ozark Mountains** in brown.
- Trace the symbols for the **Everglades** in blue.

Part 2: Identifying States and Capitals


- **Little Rock** is the capital of Arkansas. Label it **1**. Color Arkansas orange.
- **Jackson** is the capital of Mississippi. Label it **2**. Color Mississippi red.
- **Montgomery** is the capital of Alabama. Label it **3**. Color Alabama purple.
- **Atlanta** is the capital of Georgia. Label it **4**. Color Georgia pink.
- **Baton Rouge** is the capital of Louisiana. Label it **5**. Color Louisiana green.
- **Tallahassee** is the capital of Florida. Label it **6**. Color Florida yellow.

Part 3: Identifying Important Geographical Features

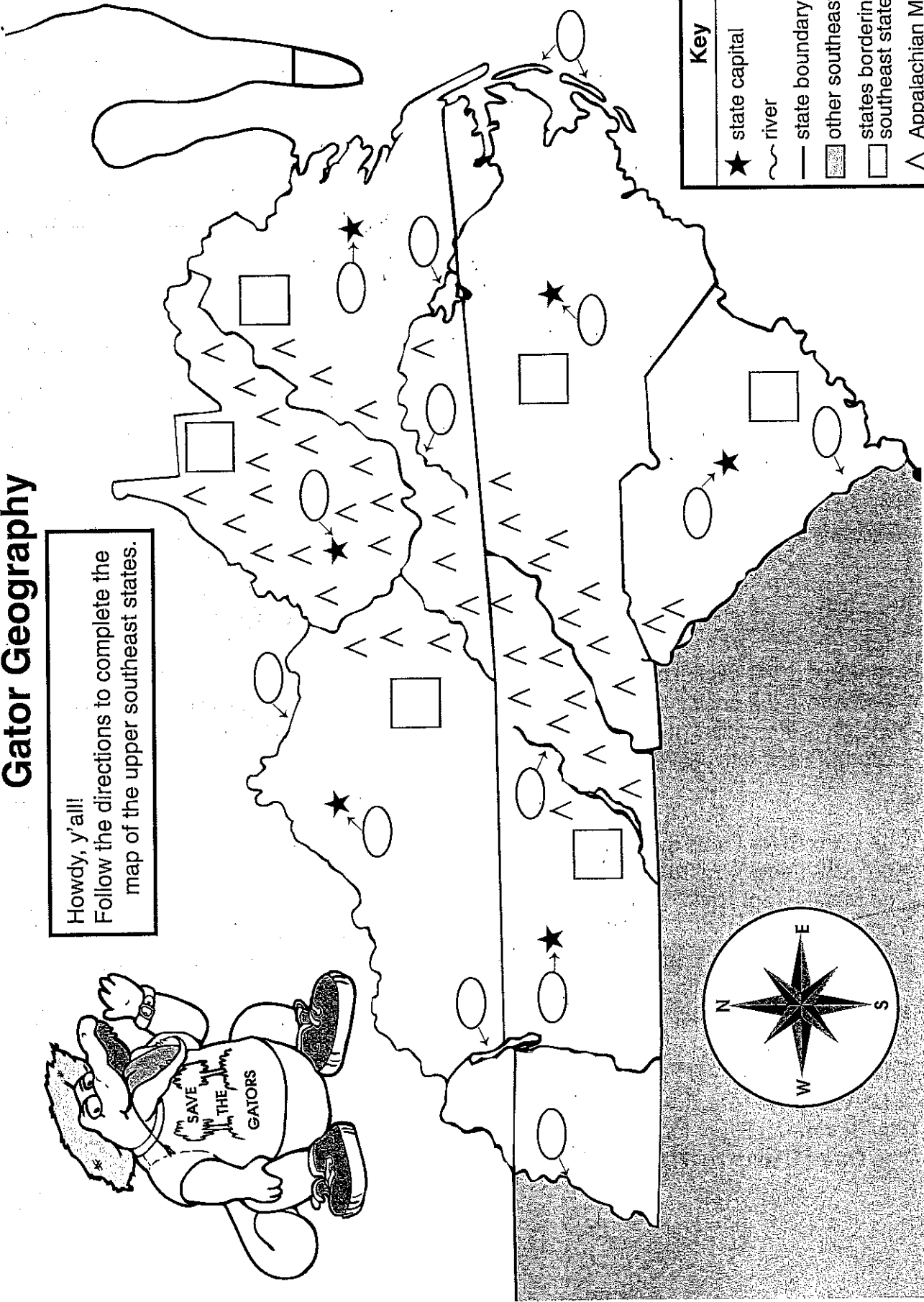
- The **Mississippi River** forms the border between Arkansas and Mississippi and a portion of the border between Louisiana and Mississippi. Label it **7**. Trace it in blue.
- The **Pearl River** flows from the middle of Mississippi to the Gulf of Mexico. Label it **8**. Trace it in blue.
- The **Chattahoochee River** flows from northern Georgia through Florida and into the Gulf of Mexico. Label it **9**. Trace it in blue.
- **Lake Okeechobee** lies in south central Florida. Label it **10**. Color it blue.
- **Cape Canaveral** lies off the eastern coast of Florida. It is the site of space shuttle launches. Label it **11**.
- The **Mississippi Delta** lies at the mouth of the Mississippi River in southern Louisiana. Label it **12**.

Name _____

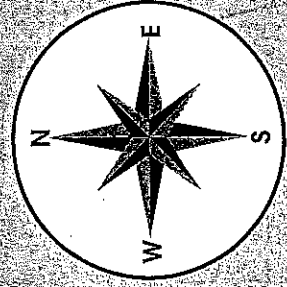
Gator Geography



Howdy, y'all!
Follow the directions to complete the map of the upper southeast states.



Key	
★	state capital
~	river
—	state boundary
▨	other southeast states
□	states bordering southeast states
∧	Appalachian Mountains



How to Use Pages 25 and 26

Copy the map for each student. The map can be used in several ways.

- For an independent activity, copy the directions below for each student.
- For a cooperative-learning activity, divide students into small groups. Copy the directions for each group. Have students work together to complete their maps.
- For a teacher-directed activity, make a transparency of the directions and project them onto a screen. Cover the directions with a sheet of paper, sliding the paper down to reveal one step at a time as you assist students in completing their maps or as you complete an overhead transparency of the map along with your students.

Name _____ Map skills

The Upper Southeast States

Follow the directions below to complete the map. Do not color the □s and ○s on your map.

Part 1: Basic Labeling and Coloring

- Label each □ with the state's postal abbreviation.
- Color the other bordering southeast states green.
- Color any other states bordering the southeast states yellow.
- The **Atlantic Ocean** is east of the southeast states. Color it blue.
- Trace the symbols for the **Appalachian Mountains** in brown.

Part 2: Identifying States and Capitals

- **Charleston** is the capital of West Virginia. Label it **1**. Color West Virginia orange.
- **Richmond** is the capital of Virginia. Label it **2**. Color Virginia green.
- **Frankfort** is the capital of Kentucky. Label it **3**. Color Kentucky purple.
- **Nashville** is the capital of Tennessee. Label it **4**. Color Tennessee pink.
- **Raleigh** is the capital of North Carolina. Label it **5**. Color North Carolina yellow.
- **Columbia** is the capital of South Carolina. Label it **6**. Color South Carolina red.

Part 3: Identifying Important Geographical Features

- The **Ohio River** forms the northwestern border of West Virginia and the northern border of Kentucky. Label it **7**. Trace it in blue.
- The **Mississippi River** forms the western borders of Kentucky and Tennessee. Label it **8**. Trace it in blue.
- **Kerr Reservoir** lies in southern Virginia and northern North Carolina. Label it **9**. Color it blue.
- The **Roanoke River** flows from Virginia through North Carolina. Label it **10**. Trace it in blue.
- **Kentucky Lake** lies across the border between Tennessee and Kentucky. Label it **11**. Color it blue.
- The **Tennessee River** flows through the Appalachian Mountains in eastern Tennessee. Label it **12**. Trace it in blue.
- The **Savannah River** forms the western border of South Carolina. Label it **13**. Trace it in blue.
- The **Outer Banks** lie off the coast of North Carolina. Label them **14**.